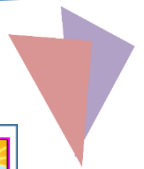


Name: _____

Date: _____



Types of Angles 1



L.O. - To identify types of angles

What type of angle?

obtuse

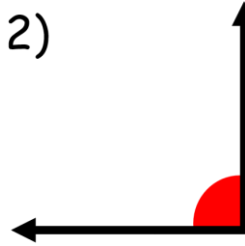
acute

right angle

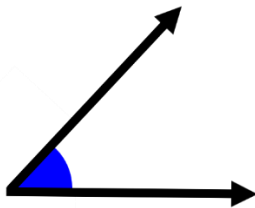
1)



2)



3)



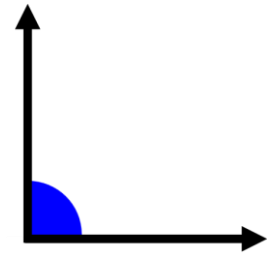
4)



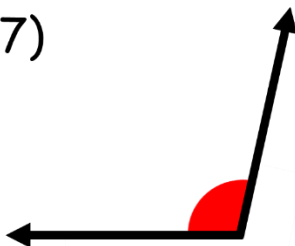
5)



6)



7)



8)

